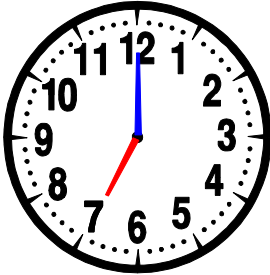





Lire l'heure... (02)


- La petite aiguille indique **les heures (h)**.
- La grande aiguille indique **les minutes (min)**.
- Dessine les deux aiguilles sur les horloges suivantes :




7 h 00 min




8 h 00 min




10 h 00 min




12 h 00 min




2 h 00 min




5 h 00 min




9 h 00 min




6 h 00 min




13 h 00 min



16 h 00 min

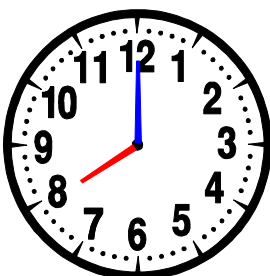


18 h 00 min






20 h 00 min

- Quelle heure est-il ?



8h00 ou 20h00



.....