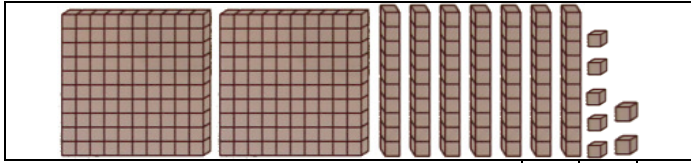
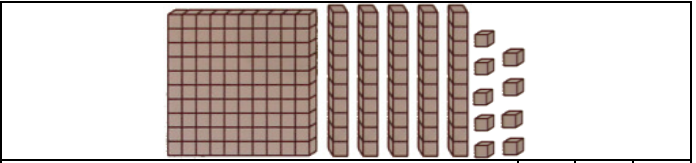




<b>COMPTER</b>	<h1 style="margin: 0;">NUMÉRATION</h1> <h2 style="margin: 0;">Je compte jusqu'à... 999 <small>(03)</small></h2>
----------------	---

• **Dénombrer les quantités suivantes :**

													
<p>.....</p> <table border="1" style="margin: auto; border-collapse: collapse;"> <tr> <td style="width: 33%; text-align: center;">C</td> <td style="width: 33%; text-align: center;">D</td> <td style="width: 33%; text-align: center;">U</td> </tr> <tr> <td style="text-align: center;">.....</td> <td style="text-align: center;">.....</td> <td style="text-align: center;">.....</td> </tr> </table>	C	D	U	.....	.....	.....	<p>.....</p> <table border="1" style="margin: auto; border-collapse: collapse;"> <tr> <td style="width: 33%; text-align: center;">C</td> <td style="width: 33%; text-align: center;">D</td> <td style="width: 33%; text-align: center;">U</td> </tr> <tr> <td style="text-align: center;">.....</td> <td style="text-align: center;">.....</td> <td style="text-align: center;">.....</td> </tr> </table>	C	D	U	.....	.....	.....
C	D	U											
.....	.....	.....											
C	D	U											
.....	.....	.....											

													
<p>.....</p> <table border="1" style="margin: auto; border-collapse: collapse;"> <tr> <td style="width: 33%; text-align: center;">C</td> <td style="width: 33%; text-align: center;">D</td> <td style="width: 33%; text-align: center;">U</td> </tr> <tr> <td style="text-align: center;">.....</td> <td style="text-align: center;">.....</td> <td style="text-align: center;">.....</td> </tr> </table>	C	D	U	.....	.....	.....	<p>.....</p> <table border="1" style="margin: auto; border-collapse: collapse;"> <tr> <td style="width: 33%; text-align: center;">C</td> <td style="width: 33%; text-align: center;">D</td> <td style="width: 33%; text-align: center;">U</td> </tr> <tr> <td style="text-align: center;">.....</td> <td style="text-align: center;">.....</td> <td style="text-align: center;">.....</td> </tr> </table>	C	D	U	.....	.....	.....
C	D	U											
.....	.....	.....											
C	D	U											
.....	.....	.....											

• **Retrouve les nombres suivant l'exemple :**

**400 + 50 + 8 = 458**

- 100 + 10 + 1 = .....
- 300 + 90 + 3 = .....
- 900 + 70 + 8 = .....
- 900 + 10 = .....

- 500 + 50 + 5 = .....
- 600 + 40 + 3 = .....
- 800 + 30 + 2 = .....
- 200 + 10 + 9 = .....
- 700 + 7 = .....

• **Décompose les nombres suivant l'exemple :**

**458 = 400 + 50 + 8**

- 111 = .....
- 956 = .....
- 878 = .....
- 321 = .....

- 295 = .....
- 310 = .....
- 484 = .....
- 701 = .....
- 536 = .....

• **Complète le tableau suivant :**

Nombres donnés		Chiffre des...		
		centaines	dizaines	unités
<b>trois cent vingt-cinq</b>	<b>325</b>	<b>3</b>	<b>2</b>	<b>5</b>
cinq cent quatre-vingt-douze				
deux cent trente				
huit cent quatre				